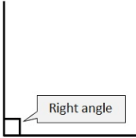











Week 3 06.04.20	TT Rockstars	Arithmetic	Maths	Spelling and Grammar	Main Literacy Activity	Topic- Seasons
<p>Monday</p> <p>Remember to have some exercise and mindfulness time</p>	<p>At least 15 minutes! Remember you can challenge you teacher and your friends as well!</p>	<p>Continue the sequence:</p> <p>115 125 135 ____ ____ ____</p>	<p>Look at the example of a right angle.</p>  <p>How many right angles do the shapes below have?</p> <div style="display: flex; justify-content: space-around;"> <div style="text-align: center;">  Rectangle </div> <div style="text-align: center;">  Circle </div> </div> <div style="display: flex; justify-content: space-around;"> <div style="text-align: center;">  Square </div> <div style="text-align: center;">  Triangle </div> </div>	<p>Practise spelling the months of the year.</p> <p>January February March April May June July August September October November December</p> <p>Remember months of the year start with a capital letter!</p>	<p>Learn this poem.</p> <p>30 days has September, April, June and November, All the rest have 31, Excepting February alone, Which only has 28 days clear, And 29 in each leap year.</p> <p>Can you remember it without looking at the words? Ask a grown-up to test you?</p>	<p>Research the answers to the following questions:</p> <p>How many seasons are there in a year?</p> <p>Which months are in which season?</p> <p>Which is the coldest season in the UK?</p> <p>Which is the warmest season in the UK?</p>
<p>Tuesday</p> <p>Remember to have some exercise and mindfulness time</p>	<p>At least 15 minutes! Remember you can challenge you teacher and your friends as well!</p>	<p>What is the missing number?</p> <p>$22 + _ = 100$ $_ + 15 = 100$ $60 + _ = 99$ $_ + 24 = 62$</p>	<p>How many right angles does this window have?</p> 	<p>Write a sentence for each month of the year.</p> <p>Remember capital letters and full stops.</p> <p><u>Example</u></p> <ol style="list-style-type: none"> January is the first month of the year and it is when people often make new year's resolutions.\ 	<p>Practise the poem again: 30 days has September, April, June and November, all the rest have 31, excepting February alone, Which only has 28 days clear, and 29 in each leap year.</p> <p>Write the poem out in your very best handwriting and illustrate it.</p>	<p>Watch the videos below.</p> <p>https://www.bbc.co.uk/bitesize/topics/zkvv4wx/articles/zcx3gk7</p> <p>https://www.bbc.co.uk/teach/class-clips-video/science-ks1-ks2-wonders-of-nature-the-changing-seasons/zh4rkmn</p> <p>Draw pictures to show what you have learnt from the videos.</p>

<p>Wednesday</p> <p>Remember to have some exercise and mindfulness time</p>	<p>At least 15 minutes! Remember you can challenge you teacher and your friends as well!</p>	<p>Which of the numbers below are odd and which are even?</p> <p>122 261 893 420 234 675</p> <p>How do you know?</p>	<p>Be a right-angle detective and make a list of as many things as you can find in your home with right angles!</p>	<p>Proofread the text below and spot the mistakes!</p> <p>During april it often rains in the uk. the days seem longer because there is more daylight. it starts get warmer outside. flowers grow and the trees are covered in blossom.</p> <p>Can you improve the text?</p>	<p>30 days has September, April, June and November, All the rest have 31, Excepting February alone, Which only has 28 days clear, And 29 in each leap year.</p> <p>Using the poem, write down how many days each month has.</p> <p>Example: January -31</p>															
<p>Thursday</p> <p>Remember to have some exercise and mindfulness time</p>	<p>At least 15 minutes! Remember you can challenge you teacher and your friends as well!</p>	<p>What do all multiples of 5 end in?</p> <p>5 10 15 20 25 30 35 40 45 50</p> <p>Write down multiples of 10. What do you notice? What about multiples of 4?</p>	<p><u>Investigation</u></p> <p>https://nrich.maths.org/2812</p>	<p>Match the homophones:</p> <table border="1" data-bbox="1128 855 1386 1098"> <tr><td>bear</td><td>right</td></tr> <tr><td>hair</td><td>too</td></tr> <tr><td>write</td><td>where</td></tr> <tr><td>to</td><td>bear</td></tr> <tr><td>wear</td><td>their</td></tr> <tr><td>no</td><td>hare</td></tr> <tr><td>there</td><td>know</td></tr> </table>	bear	right	hair	too	write	where	to	bear	wear	their	no	hare	there	know	<p>Which month of the year is your favourite and why?</p> <p>Write sentences to answer the question and use the words when and because.</p>	<p>Create a piece of artwork based on Spring.</p> <p><u>Possible Ideas</u> Lambs in a field Trees with blossom on Young rabbits Daffodils</p>
bear	right																			
hair	too																			
write	where																			
to	bear																			
wear	their																			
no	hare																			
there	know																			

<p style="text-align: center;">Friday</p> <p>Remember to have some exercise and mindfulness time</p>	<p>At least 15 minutes! Remember you can challenge you teacher and your friends as well!</p>	<p>Which numbers below are multiples of 8?</p> <p>20 16 24 41 82 88</p> <p>How do you know?</p>	<p>Create a poster to inform other children about what right angles are.</p> <p>Include a definition of what a right angle is and examples of right angles.</p> <p>Make your poster colourful and eye-catching.</p>	<p>Write a sentence using each of the words below:</p> <p>to too two</p>	<p>Write an information text about the seasons.</p> <p>Main heading: The Seasons</p> <p>Subheadings: Spring, Summer, Autumn and Winter</p> <p>Include an introduction underneath the main heading.</p> <p>Remember conjunctions!</p> <p>Proofread your work!</p>	<div style="text-align: center;">     </div> <p>Create your own seasons calendar!</p>
---	--	---	---	--	--	---