



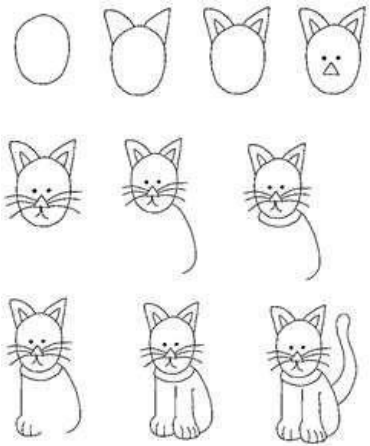
	TT Rockstars	Arithmetic	Maths	Spelling and Grammar	Main Literacy Activity	Topic									
<p>Monday</p> <p>Remember to have some exercise and mindfulness time!</p>	<p>At least 15 minutes!</p> <p>Remember you can challenge your teacher and your friends as well!</p>	<p>Complete the missing number sequence.</p> <table border="1"> <tr><td>1050</td></tr> <tr><td>1000</td></tr> <tr><td>950</td></tr> <tr><td> </td></tr> <tr><td> </td></tr> <tr><td> </td></tr> <tr><td> </td></tr> <tr><td> </td></tr> <tr><td> </td></tr> </table>	1050	1000	950							<p>This week we would like you to solve some problems. Make sure you persevere until you work out the answers!</p> <p>Choc bars cost 26p each.</p>  <p>Fruit bars cost 18p each.</p>  <p>Anil spent exactly £5 on a mixture of choc bars and fruit bars. How many of each did he buy?</p> <p>Remember £5 is 500p!</p>	<p>Read the words below.</p> <p>thunder cover occur control visit</p> <p>Discuss what each word means. You could use a dictionary to check!</p>	<p>Read the poem and answer the questions below.</p> <p>What does the word 'frocks' mean?</p> <p>What is a window-ledge?</p> <p>What do you like about this poem?</p> <p>How would you say the poem?</p>	<p>Watch the video below about the UK.</p> <p>https://www.bbc.co.uk/bitesize/topics/zyhp34j/articles/z4v3jjhv</p> <p>Do the activity online too.</p> <p>Do you know what the capital cities of England, Northern Ireland, Scotland and Wales are?</p> <p>You could draw and label a map of the UK.</p>
1050															
1000															
950															

Cats Sleep Anywhere

Cats sleep, anywhere,
Any table, any chair
Top of piano, window-ledge,
In the middle, on the edge,
Open drawer, empty shoe,
Anybody's lap will do,
Fitted in a cardboard box,
In the cupboard, with your frocks-

Anywhere! They don't care!
Cats sleep anywhere.

Eleanor Farjeon

<p>Tuesday</p> <p>Remember to have some exercise and mindfulness time!</p>	<p>At least 15 minutes!</p> <p>Remember you can challenge your teacher and your friends as well!</p>	<p>Complete the missing number sequence.</p> <table border="1"> <tr><td>129</td></tr> <tr><td>139</td></tr> <tr><td>149</td></tr> <tr><td> </td></tr> <tr><td> </td></tr> <tr><td> </td></tr> <tr><td> </td></tr> <tr><td> </td></tr> <tr><td> </td></tr> </table>	129	139	149							<p>Line of symmetry</p> <p>You need: some squared paper, a red pen, a green pen and a blue pen.</p> <p>Gopal had six squares: two red, two green, two blue. He put them in a line. The squares made a symmetrical pattern.</p> <table border="1"> <tr> <td>red</td> <td>blue</td> <td>green</td> <td>green</td> <td>blue</td> <td>red</td> </tr> </table> <p>Arrange six squares in a line. Make two squares red, two green and two blue. Make the line of squares symmetrical.</p> <p>How many different lines can you make like this?</p>	red	blue	green	green	blue	red	<p>Draw pictures for the words below and write the words.</p> <p>thunder cover occur control visit</p>	<p>Make a list of words that rhyme in the poem, Example: anywhere and chair</p>	<p>Follow the steps below to draw a picture of a cat.</p> 
129																					
139																					
149																					
red	blue	green	green	blue	red																

Wednesday

Remember to have some exercise and mindfulness time!

At least 15 minutes! Remember you can challenge your teacher and your friends as well!

Complete the missing number sequence.

380
388
396

Card sharp

Take ten cards numbered 0 to 9.



1. Pick three cards with a total of 12. You can do it in 10 different ways. See if you can record them all.
2. Now pick four cards with a total of 12. How many different ways can you do it?
3. Can you pick five cards with a total of 12?

Write the sentences below and complete them using our words from this week.

1. We went on a _____ to a chocolate factory when we were learning about food.
2. Sometimes there is _____ and lightning.
3. The word _____ means to happen.
4. We had to _____ up the food until we were ready to eat it.
5. I can _____ what my robot does by pressing different buttons.

Write the poem out in your best handwriting and illustrate it.

Learn the names of some animals in Spanish. Watch the video below. Then watch it again, pause the video and write the names of each animal in Spanish.

<https://www.youtube.com/watch?v=jdBlIV3RhDM>

Thursday

Remember to have some exercise and mindfulness time!

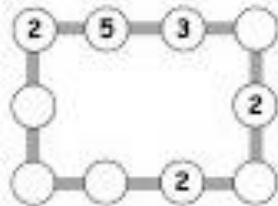
At least 15 minutes! Remember you can challenge your teacher and your friends as well!

Complete the missing number sequence.

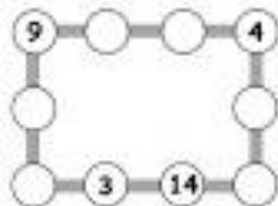
544
540
536

Number lines

1. Make each line add up to 16.



2. Make each line add up to 20.



3. Make up your own puzzle like this. Ask a friend to do it.

Practise spelling this week's words.

Look at a word.

Say the word.

Cover it up.

Write the word.

Check. Have you spelt it correctly?

look	
say	
cover	
write	
check	

Learn the poem. Draw pictures to help you to learn it and make up actions to accompany your voice.

It is the end of the school year.

Write down three things that you enjoyed when you were in Year Three.

Write down three things that you are looking forward to in Year Four.

Friday

Remember to have some exercise and mindfulness time!

At least 15 minutes! Remember you can challenge you teacher and your friends as well!

Complete the missing number sequence.

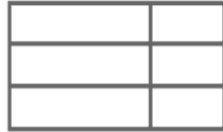
107
114
121

Spot the shapes 1

1. How many triangles can you count?



2. How many rectangles can you count?



Have a spelling test!

How many words were you able to spell correctly from this week's list? Which words do you need to practise spelling?



Perform the poem to your family.

Mindfulness

The word gratitude means thankful. What are you thankful for? Draw a jar and write down things that you are grateful for inside the jar.

Think about different people, things, and events you are grateful for. Write what and who you are grateful for inside your "Gratitude Jar" below.

