



















<b>Week beginning</b> <b>1 June 2020</b>	<b>Maths</b> <i>Spend 10 minutes each day on TT Rock Stars and complete work set by your teacher.</i>	<b>Literacy</b>	<b>Topic</b>																						
<b>Monday</b>	<p>1. What number is three thousand and six more than four thousand, six hundred and ninety-five?</p> <p>2. Subtract 6725 from 8053.</p> <p>Write each of the following in metres and centimetres.</p> <p>(a) 130 cm = <input type="text"/> m <input type="text"/> cm</p> <p>(b) 402 cm = <input type="text"/> m <input type="text"/> cm</p> <p>(c) 865 cm = <input type="text"/> m <input type="text"/> cm</p> <p>(d) 999 cm = <input type="text"/> m <input type="text"/> cm</p> <div style="border: 1px solid black; padding: 5px; width: fit-content; margin-left: auto; margin-right: auto;"> <p><b>Remember</b> there are</p> <p>100 cm in a metre</p> <p>1000 metres in 1km</p> </div>	<p><b><u>Spelling and Grammar</u></b></p> <p>This week we are re looking at homophones. Homophones are words that <b>sound</b> the same but are spelt differently and have a different meaning.</p> <p><b><u>See homophones sheet for activity.</u></b></p>	<p><b><u>Music</u></b></p> <p>Mr Miller has sent you a <a href="#">video clip</a> of him playing a tune for you. We hope you enjoy listening to 'It's a wonderful world'.</p>																						
<b>Tuesday</b>	<p>3. How much smaller is 4237 than 5138?</p> <p>4. What number is four thousand, three hundred and forty more than five thousand and seventy-six?</p> <p>Match.</p> <table style="width: 100%; border: none;"> <tr> <td style="width: 50%;">(a) 1 m 34 cm ●</td> <td style="width: 50%;">● 997 cm</td> </tr> <tr> <td>(b) 3 m 7 cm ●</td> <td>● 134 cm</td> </tr> <tr> <td>(c) 2 m 56 cm ●</td> <td>● 804 cm</td> </tr> <tr> <td>(d) 9 m 97 cm ●</td> <td>● 256 cm</td> </tr> <tr> <td>(e) 8 m 4 cm ●</td> <td>● 307 cm</td> </tr> </table>	(a) 1 m 34 cm ●	● 997 cm	(b) 3 m 7 cm ●	● 134 cm	(c) 2 m 56 cm ●	● 804 cm	(d) 9 m 97 cm ●	● 256 cm	(e) 8 m 4 cm ●	● 307 cm	<p><b><u>Writing</u></b></p> <p><b><u>See attached 'Poetry time' sheet.</u></b></p>	<p><b><u>Spanish</u></b></p> <p style="text-align: center;"><b><u>La Familia</u></b></p> <p style="text-align: center;">Write the correct word under each picture.</p> <div style="border: 1px solid black; padding: 10px; text-align: center; margin: 10px auto; width: 80%;"> <p>hermano   hermana   abuelo</p> <p>madre   abuela   padre</p> </div> <table style="width: 100%; text-align: center; border: none;"> <tr> <td></td> <td></td> <td></td> </tr> <tr> <td><input type="text"/></td> <td><input type="text"/></td> <td><input type="text"/></td> </tr> <tr> <td></td> <td></td> <td></td> </tr> <tr> <td><input type="text"/></td> <td><input type="text"/></td> <td><input type="text"/></td> </tr> </table>				<input type="text"/>	<input type="text"/>	<input type="text"/>				<input type="text"/>	<input type="text"/>	<input type="text"/>
(a) 1 m 34 cm ●	● 997 cm																								
(b) 3 m 7 cm ●	● 134 cm																								
(c) 2 m 56 cm ●	● 804 cm																								
(d) 9 m 97 cm ●	● 256 cm																								
(e) 8 m 4 cm ●	● 307 cm																								
																									
<input type="text"/>	<input type="text"/>	<input type="text"/>																							
																									
<input type="text"/>	<input type="text"/>	<input type="text"/>																							

**Wednesday**

5. Calculate the difference between three thousand, two hundred and twelve, and two thousand and forty-six.

6. Add £23.71 to £78.46.

Write each the following in centimetres.

(a) 2 m 40 cm =  cm

(b) 3 m 2 cm =  cm

(c) 5 m 65 cm =  cm

(d) 8 m 7 cm =  cm

Write each of the following in metres.

(a) 2 km 400 m =  m

(b) 6 km 20 m =  m

(c) 9 km 65 m =  m

(d) 5 km 7 m =  m

**Thursday**

7. What number is 5002 less than 7001?

8. Increase £76.83 by £22.71.

Match.

(a) 1 km 450 m ●

● 1005 m

(b) 1 km 45 m ●

● 10 004 m

(c) 1 km 5 m ●

● 1450 m

(d) 1 km 50 m ●

● 1045 m

(e) 10 km 4 m ●

● 1050 m

**Geography**

This week we are going to continue our learning on the oceans and seas that we started a few weeks ago.

**Activity 1**

**Reading:** There is a Cracking Comprehension text to read with questions to answer like you do in class.

Remember the strategies we use, VIPERS!!

**Please see link/ button to access this.**

**Activity 2**

Now use your learning about the oceans and seas to design and make a poster. Maybe you could do a presentation to members of you family about your learning?

We would love to see everything you have learnt.

Friday

9. What number is the sum of six thousand and sixty and two thousand, four hundred and thirteen?

10. Decrease 2973 by 628.

Arrange the following from shortest to longest.

(a) 130 cm      2 m 65 cm      67 cm

<input type="text"/>	,	<input type="text"/>	,	<input type="text"/>
----------------------	---	----------------------	---	----------------------

(b) 1 km 900 m      1 km 90 m      1009 m

<input type="text"/>	,	<input type="text"/>	,	<input type="text"/>
----------------------	---	----------------------	---	----------------------

Arrange the following from longest to shortest.

(a) 320 cm      3 m 2 cm      30 m 2 cm

<input type="text"/>	,	<input type="text"/>	,	<input type="text"/>
----------------------	---	----------------------	---	----------------------

(b) 2 km 800 m      2080 m      2008 m

<input type="text"/>	,	<input type="text"/>	,	<input type="text"/>
----------------------	---	----------------------	---	----------------------